
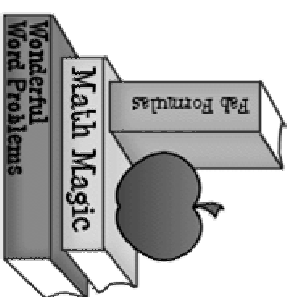


UNIT 3

MATH MESSAGE BOOK




Name: _____



UNIT 3

MATH MESSAGE BOOK



Name: _____

3.1

52= _____ tens and _____ ones

25= _____ tens and _____ ones

3.1

52= _____ tens and _____ ones

25= _____ tens and _____ ones

3.2

Take 10 (P), 6 (N), 6 (D), 4 (Q),

and 2 \$1 from your tool-kit money.

How much money is that?

3.2

Take 10 (P), 6 (N), 6 (D), 4 (Q),

and 2 \$1 from your tool-kit money.

How much money is that?

3.3

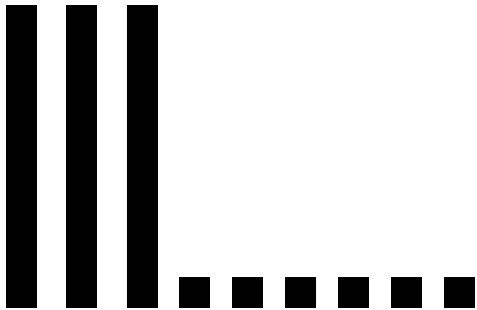
Take out your tool-kit clock.
Set the hands to show the time
when school start.
What time is it?

3.3

Take out your tool-kit clock.
Set the hands to show the time
when school start.
What time is it?

3.4

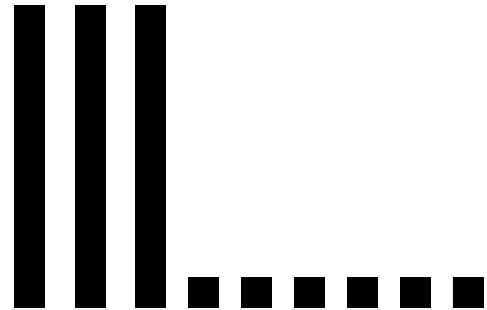
The picture below shows one way to draw 36.



Draw at least two other ways to show 36.

3.4

The picture below shows one way to draw 36.



Draw at least two other ways to show 36.

3.5

Complete Counting Pockets

1. How many pockets are in the clothes you are wearing now? _____
2. Count the pockets on your shirt, on your pants or skirt, and on anything else that you are wearing.
3. Complete the diagram.

Total		
Shirt	Pants or Skirt	Other

4. Write your total number of pockets very large on a blank sheet of paper.

3.5

Complete Counting Pockets

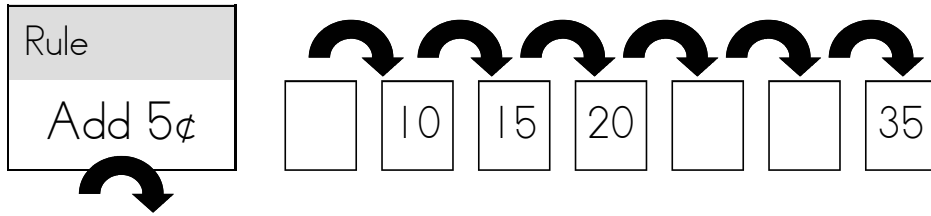
1. How many pockets are in the clothes you are wearing now? _____
2. Count the pockets on your shirt, on your pants or skirt, and on anything else that you are wearing.
3. Complete the diagram.

Total		
Shirt	Pants or Skirt	Other

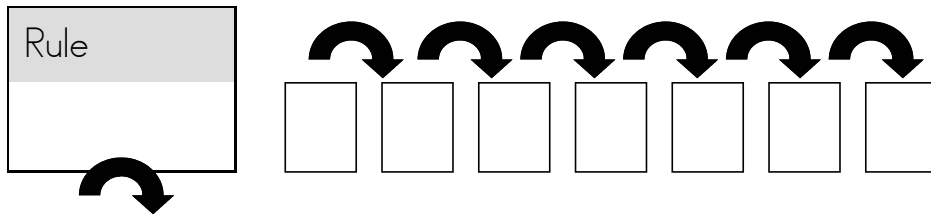
4. Write your total number of pockets very large on a blank sheet of paper.

3.6

Here is a frames and arrows problem that uses nickels:

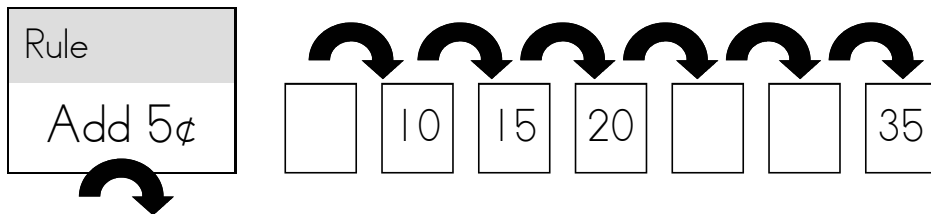


Make up a problem that uses nickels, dimes, or quarters.

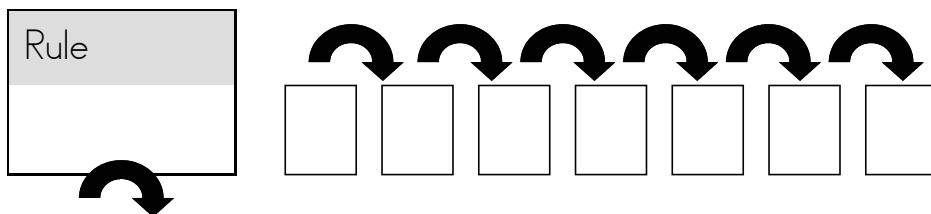


3.6

Here is a frames and arrows problem that uses nickels:



Make up a problem that uses nickels, dimes, or quarters.



3.7

You buy a toy that costs 48¢.
Which coins would you use to pay for it?

Draw the coins. Use \textcircled{P} , \textcircled{N} , \textcircled{D} , or \textcircled{Q} .

3.7

You buy a toy that costs 48¢.
Which coins would you use to pay for it?

Draw the coins. Use \textcircled{P} , \textcircled{N} , \textcircled{D} , or \textcircled{Q} .

3.8

Turn to page 76 in your journal.

Do you know what this machine is called?

Do you know how it works?

Be ready to discuss this machine.

3.8

Turn to page 76 in your journal.

Do you know what this machine is called?

Do you know how it works?

Be ready to discuss this machine.