
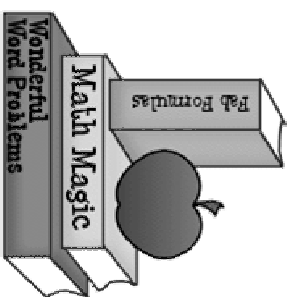


UNIT 4

MATH MESSAGE BOOK




Name: _____



UNIT 4

MATH MESSAGE BOOK



Name: _____

4.1

Which weighs more - a dry paper towel
or a wet paper towel?

Why?


4.1

Which weighs more - a dry paper towel
or a wet paper towel?

Why?

4.2


What is the total number of dots?



A hot dog costs 45¢. An orange costs 25¢.
What is the total cost?

4.2

What is the total number of dots?



A hot dog costs 45¢. An orange costs 25¢.
What is the total cost?

4.3

Why are there two sets of marks
and numbers on our
Class Thermometer poster?

4.3

Why are there two sets of marks
and numbers on our
Class Thermometer poster?

4.4

At what temperature does water freeze
(turn to ice)?

4.4

At what temperature does water freeze
(turn to ice)?

4.5

Eraser: 28¢

Notebook: 69¢

You have \$1.00.

Do you have enough money
to pay for both items?

Explain your answer.

4.5

Eraser: 28¢

Notebook: 69¢

You have \$1.00.

Do you have enough money
to pay for both items?

Explain your answer.

4.6

You buy a clock that costs \$78.

You pay with a \$100 bill.

How much is our change?

Be prepared to share your solution strategy.

4.6

You buy a clock that costs \$78.

You pay with a \$100 bill.

How much is our change?

Be prepared to share your solution strategy.

4.7

Name two things you would
measure with a ruler.

Name two things you would
measure with a tape measure.

4.7

Name two things you would
measure with a ruler.

Name two things you would
measure with a tape measure.

4.8

Make an estimate for the answer
to each problem.

Tell how you found your answer.

$$75+8$$

$$57+22$$

4.8

Make an estimate for the answer
to each problem.

Tell how you found your answer.

$$75+8$$

$$57+22$$

4.9

Make a ballpark estimate for each answer.
Write a number model for each estimate.

Unit
people

$37+58=$ _____

$473+234=$ _____

4.9

Make a ballpark estimate for each answer.
Write a number model for each estimate.

Unit
people

$37+58=$ _____

$473+234=$ _____
